

Name: \_\_\_\_\_

Horizontal Subtraction  
(Minuends up to 20)

## Subtract

$13 - 5 = \underline{\quad}$



$15 - 5 = \underline{\quad}$

$17 - 7 = \underline{\quad}$

$18 - 10 = \underline{\quad}$


$10 - 8 = \underline{\quad}$

$8 - 5 = \underline{\quad}$



# Preview

Please log in to download  
the printable version of this worksheet.



$12 - 6 = \underline{\quad}$

$12 - 8 = \underline{\quad}$

$16 - 9 = \underline{\quad}$

$15 - 10 = \underline{\quad}$

$20 - 10 = \underline{\quad}$

$11 - 6 = \underline{\quad}$

$9 - 3 = \underline{\quad}$

$13 - 9 = \underline{\quad}$

# ANSWER KEY

Horizontal Subtraction  
(Minuends up to 20)


## Subtract

$13 - 5 = \underline{8}$

$15 - 5 = \underline{10}$

$17 - 7 = \underline{10}$

$18 - 10 = \underline{8}$



# Preview

Please log in to download  
the printable version of this worksheet.



$20 - 10 = \underline{10}$

$11 - 6 = \underline{5}$

$9 - 3 = \underline{6}$

$13 - 9 = \underline{4}$